

Escribe el número y suma.

| | |
|--|--|
| | |
| | |

$$\bigcirc = \bigcirc + \bigcirc$$

| | |
|--|--|
| | |
| | |

$$\bigcirc = \bigcirc + \bigcirc + \bigcirc$$

| | |
|--|--|
| | |
| | |

$$\bigcirc = \bigcirc + \bigcirc + \bigcirc + \bigcirc$$

| | |
|--|--|
| | |
| | |

$$\bigcirc = \bigcirc + \bigcirc + \bigcirc + \bigcirc + \bigcirc$$

| | |
|--|--|
| | |
| | |

$$\bigcirc = \bigcirc + \bigcirc + \bigcirc + \bigcirc + \bigcirc + \bigcirc$$

Con regletas

Escribe el número y suma.

| | | | | |
|--|--|--|--|--|
| | | | | |
| | | | | |

$$0 = 0 + 0 + 0 + 0 + 0 + 0 + 0$$

| | | | | |
|--|--|--|--|--|
| | | | | |
| | | | | |

$$0 = 0 + 0 + 0 + 0 + 0 + 0 + 0 + 0$$

| | | | | |
|--|--|--|--|--|
| | | | | |
| | | | | |

$$0 =$$

| | | | | |
|--|--|--|--|--|
| | | | | |
| | | | | |

$$0 =$$

Com regletas

Colorea y escribe el número. Suma.



=



+



=



+



=



+



=



+



=



+



Con regletas

Escribe el número
y suma.

$$\square = \square + \square$$

$$\square = \square + \square$$

$$\square = \square + \square$$

$$\square = \square + \square$$

$$\square = \square + \square$$

$$\square = \square + \square$$

$$\square = \square + \square$$

$$\square = \square + \square$$


$$\square = \square + \square$$

$$\square = \square + \square$$

Con regletas

Descomponer com dos regletas de cores iguais

$$0 = 0 + 0$$



$$0 = 0 + 0$$




$$0 = 0 + 0$$



$$0 = 0 + 0$$

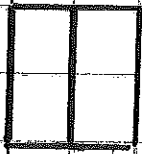


$$0 = 0 + 0$$




Com regletas

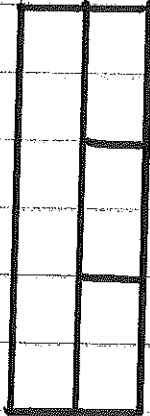
Descomponer con regletas de colores iguales.



$$0 = 0 + 0$$



$$0 = 0 + 0$$



$$0 = 0 + 0 + 0$$



$$0 = 0 + 0 + 0 + 0$$



$$0 = 0 + 0 + 0 + 0 + 0$$

Descomponer con dos regletas de colores iguales.



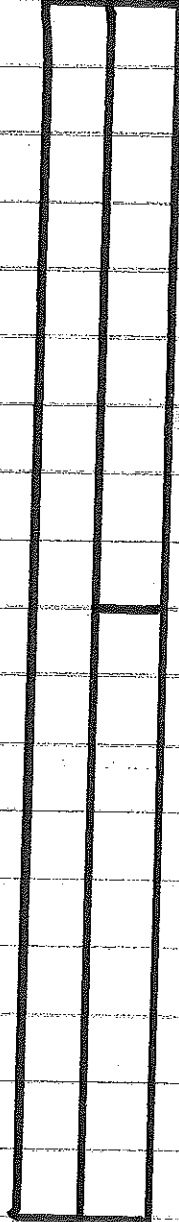
$$0 = 0 + 0$$



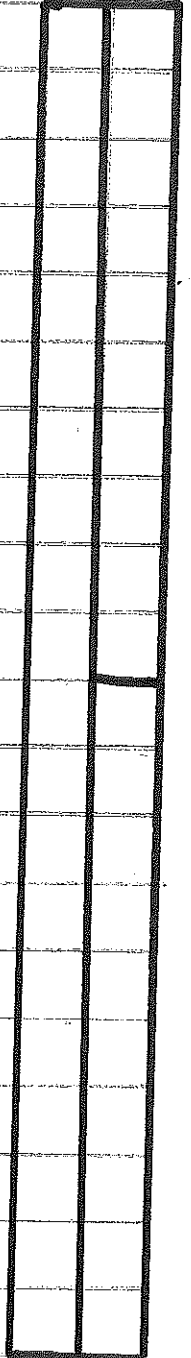
$$0 = 0 + 0$$



$$0 = 0 + 0$$



$$0 = 0 + 0$$

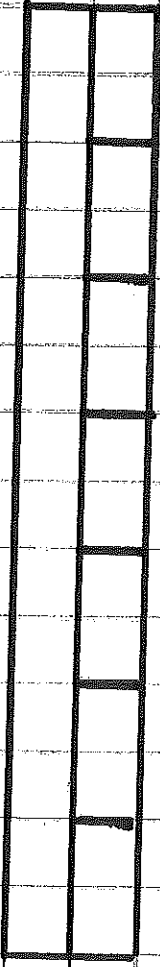


$$0 = 0 + 0$$


Descomponer con regletas da colores iguales.




$$10 = 0 + 0 + 0 + 0 + 0 + 0 + 0 + 0 + 0 + 0$$



$$10 = 0 + 0 + 0 + 0 + 0 + 0 + 0 + 0 + 0 + 0$$



$$10 =$$

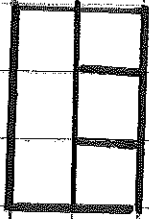


$$10 =$$



$$10 =$$

Descomponer con tres regletas.



$$4 = 2 + 2$$



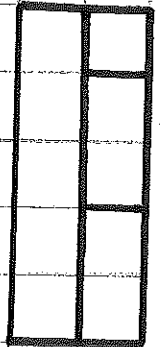
$$6 = 3 + 3$$



$$8 = 4 + 4$$




$$10 = 5 + 5$$




$$12 = 6 + 6$$

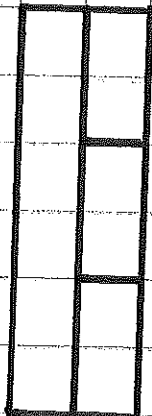
Descomponer con tres regletas.




$$3 = 1 + 1 + 1$$



$$3 = 2 + 1 + 0$$



$$3 = 1 + 2 + 0$$



$$3 = 0 + 1 + 2$$




$$3 = 0 + 2 + 1$$

Descomponer con tres regletas.



$$3 = 1 + 1 + 1$$




$$2 = 1 + 1$$



$$1 = 1$$



$$2 = 1 + 1$$




$$3 = 1 + 1 + 1$$

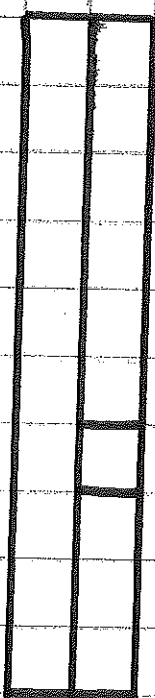
Descomponer con tres regletas.




$$3 = 1 + 1 + 1$$



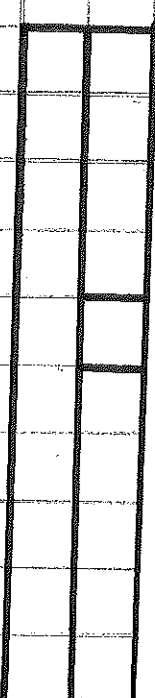
$$3 = 2 + 1$$



$$3 = 1 + 2$$

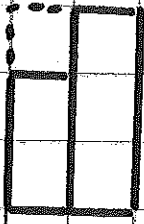


$$3 = 3$$



$$3 = 0 + 3$$


Calcula



$$3 - 2 = 1$$



$$0 - 0 = 0$$



$$0 - 0 = 0$$



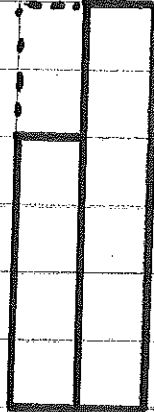
$$0 - 0 = 0$$



$$0 - 0 = 0$$



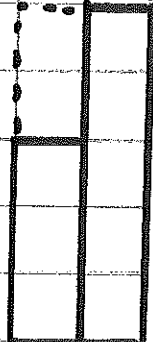
$$0 - 0 = 0$$



$$0 - 0 = 0$$



$$0 - 0 = 0$$




$$0 - 0 = 0$$

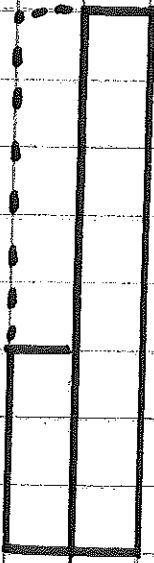


$$0 - 0 = 0$$


Calcula



$$O - O = O$$



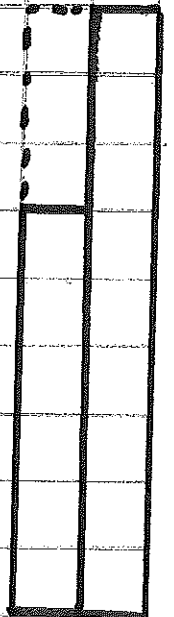
$$O - O = O$$



$$O - O = O$$




$$O - O = O$$

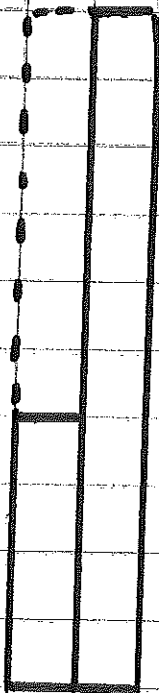


$$O - O = O$$

Calculus




$$\begin{array}{c} \bigcirc \\ - \\ \bigcirc \\ = \\ \bigcirc \end{array}$$



$$\begin{array}{c} \bigcirc \\ - \\ \bigcirc \\ = \\ \bigcirc \end{array}$$



$$\begin{array}{c} \bigcirc \\ - \\ \bigcirc \\ = \\ \bigcirc \end{array}$$

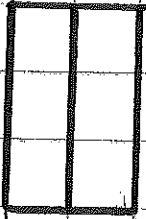


$$\begin{array}{c} \bigcirc \\ - \\ \bigcirc \\ = \\ \bigcirc \end{array}$$

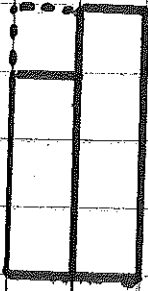


$$\begin{array}{c} \bigcirc \\ - \\ \bigcirc \\ = \\ \bigcirc \end{array}$$

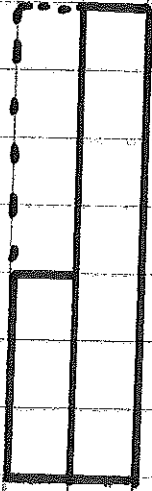
Calculus




$$0 - 0 = 0$$




$$0 - 0 = 0$$



$$0 - 0 = 0$$



$$0 - 0 = 0$$



$$0 - 0 = 0$$

Escribe el número y suma.

| | | | |
|--|--|--|--|
| | | | |
| | | | |
| | | | |

$$\square + \bigcirc = \square$$

| | | | |
|--|--|--|--|
| | | | |
| | | | |
| | | | |

$$\square + \bigcirc = \square$$

| | | | |
|--|--|--|--|
| | | | |
| | | | |
| | | | |

$$\square + \bigcirc = \square$$

| | | | |
|--|--|--|--|
| | | | |
| | | | |
| | | | |

$$\square + \bigcirc = \square$$

| | | | |
|--|--|--|--|
| | | | |
| | | | |
| | | | |

$$\square + \bigcirc = \square$$

| | | | |
|--|--|--|--|
| | | | |
| | | | |
| | | | |

$$\square + \bigcirc = \square$$

Con regletas

Escribe el número y suma.

| | | | | |
|--|--|--|--|--|
| | | | | |
| | | | | |
| | | | | |
| | | | | |

$$\boxed{} + \bigcirc = \boxed{}$$

| | | | | |
|--|--|--|--|--|
| | | | | |
| | | | | |
| | | | | |
| | | | | |

$$\boxed{} + \bigcirc = \boxed{}$$

| | | | | |
|--|--|--|--|--|
| | | | | |
| | | | | |
| | | | | |
| | | | | |
| | | | | |

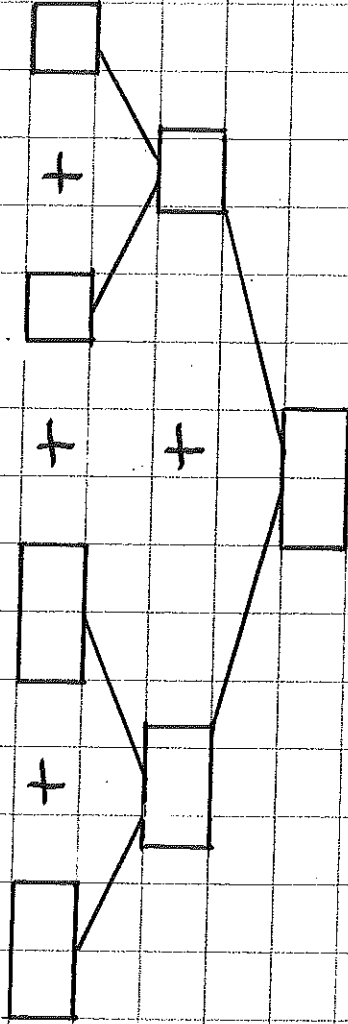
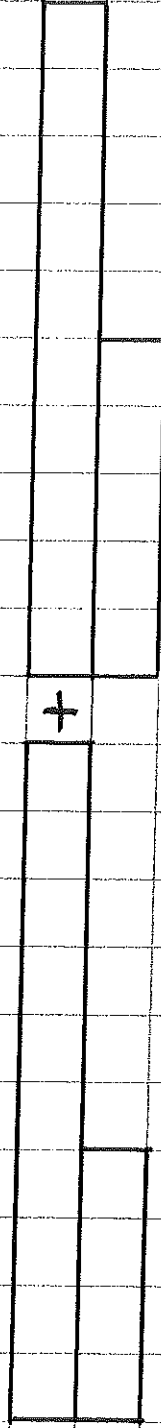

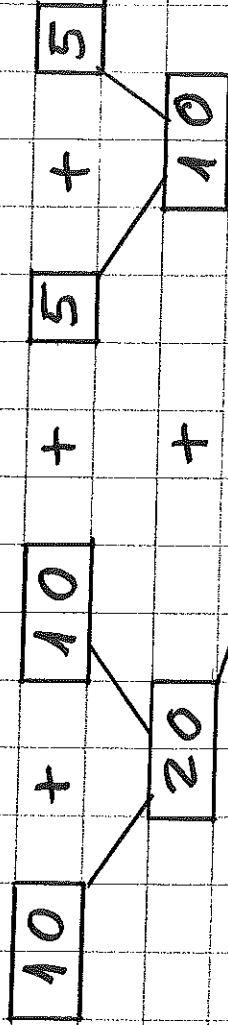
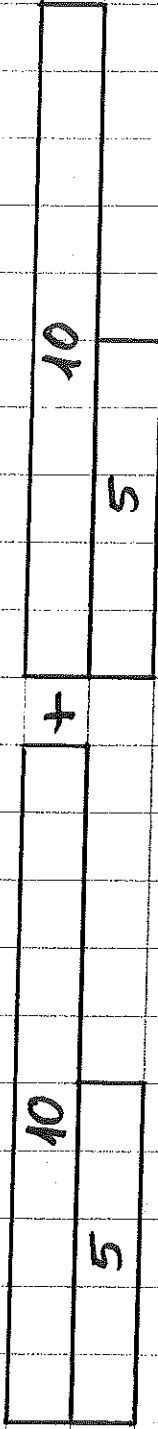
$$\boxed{} + \bigcirc = \boxed{}$$

| | | | | |
|--|--|--|--|--|
| | | | | |
| | | | | |
| | | | | |
| | | | | |
| | | | | |

$$\boxed{} + \bigcirc = \boxed{}$$

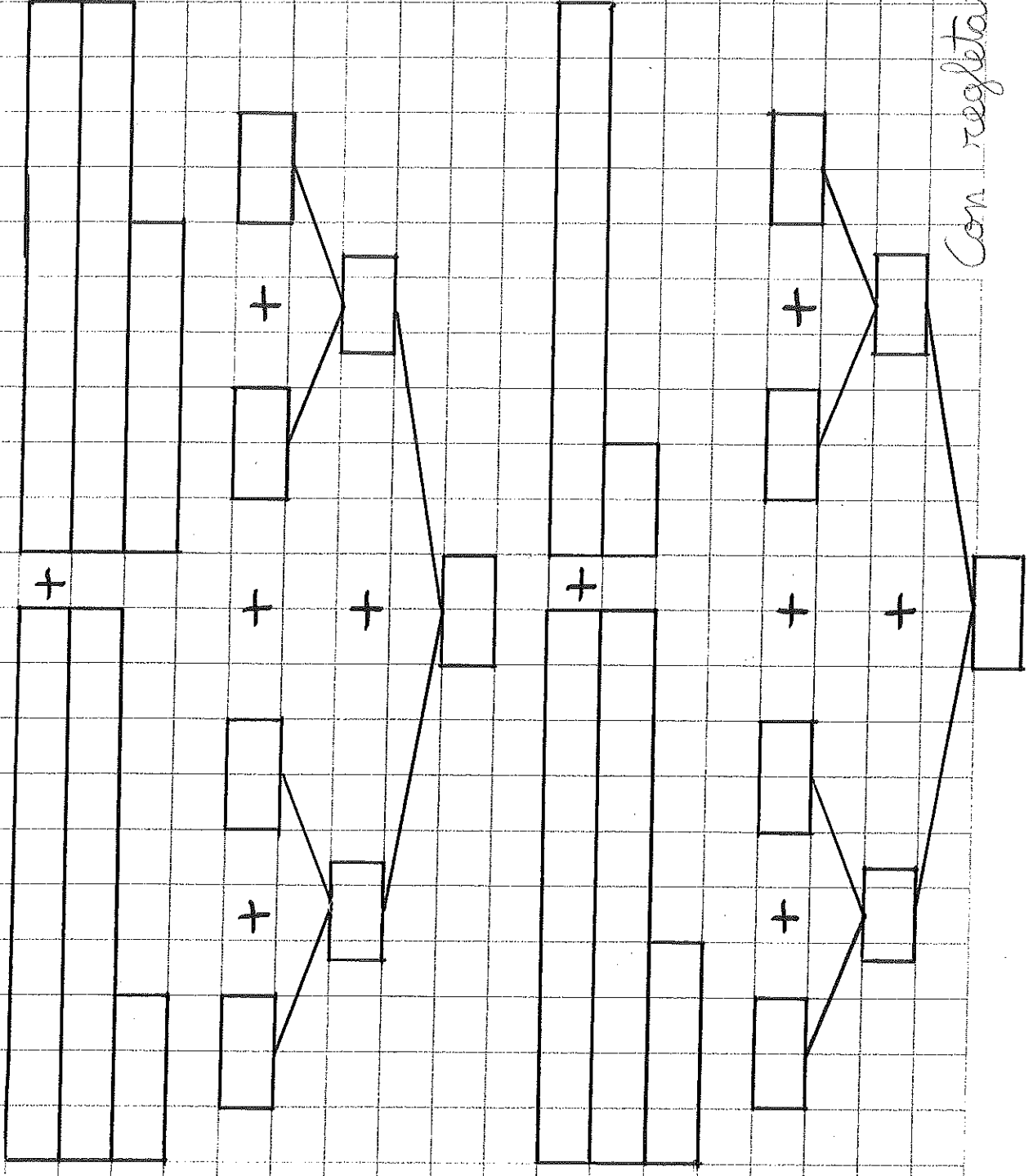
con regletas

Escribe el número y suma.



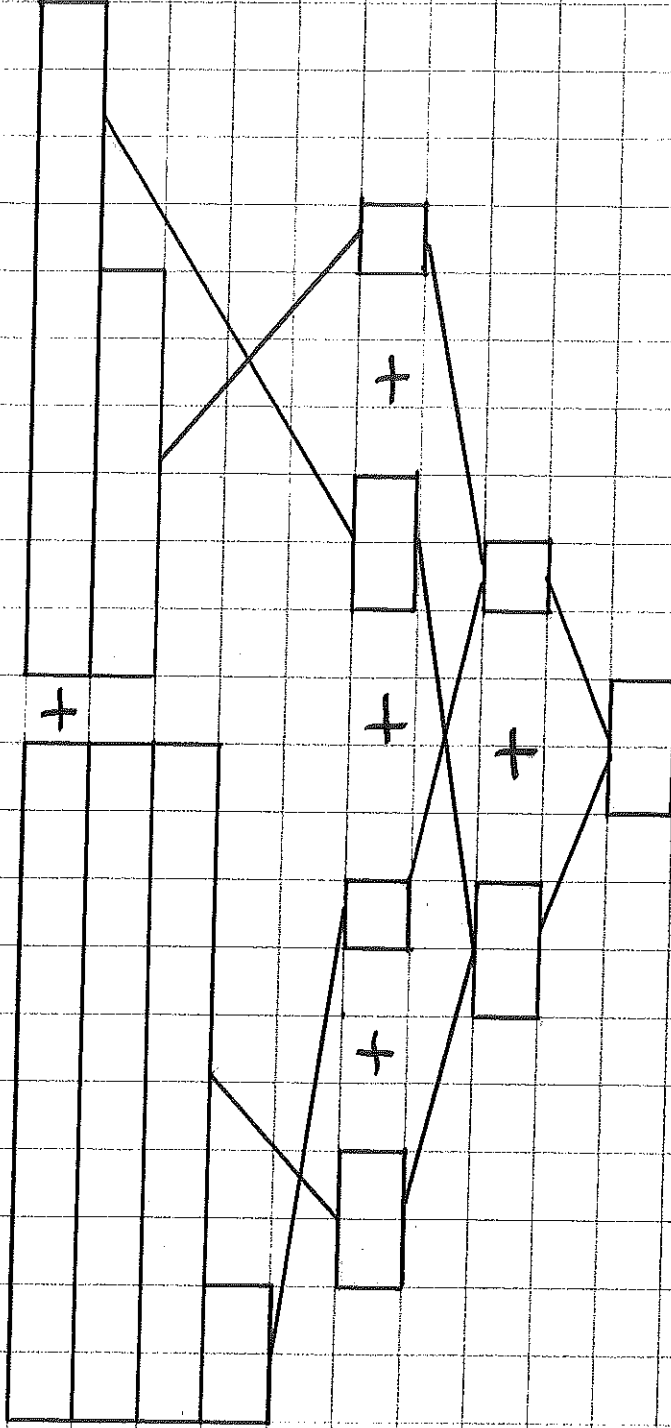
Com. Regletas

Escibe el número y suma.

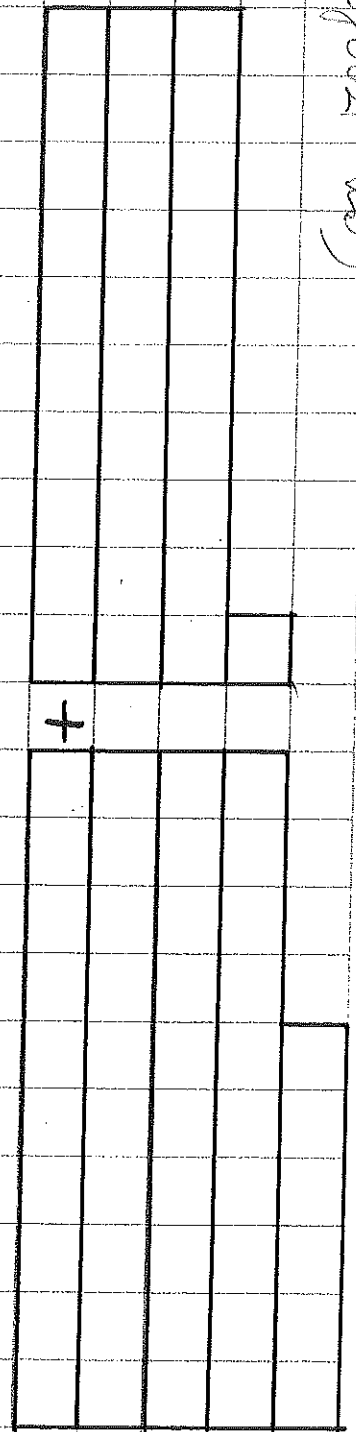


Con regletas.

Escribe el número y suma.

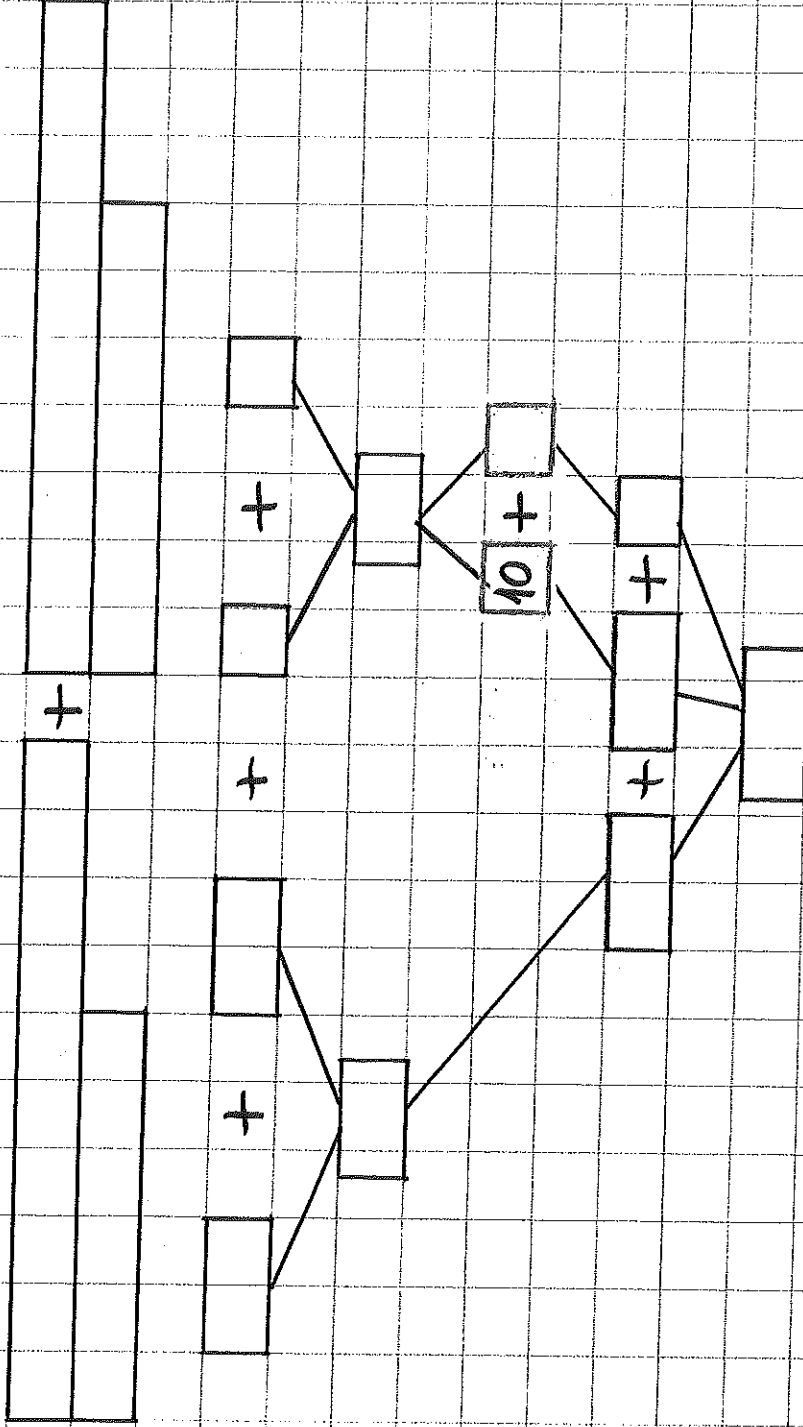


Harlo en tu cuaderno.



Con regletas

Escribe el número y suma.

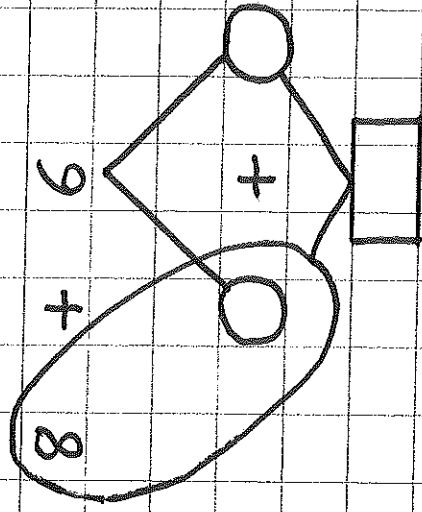
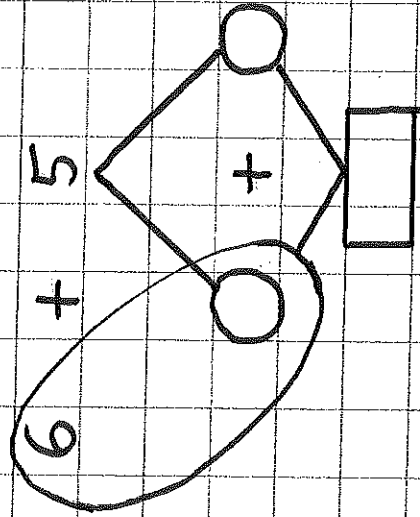
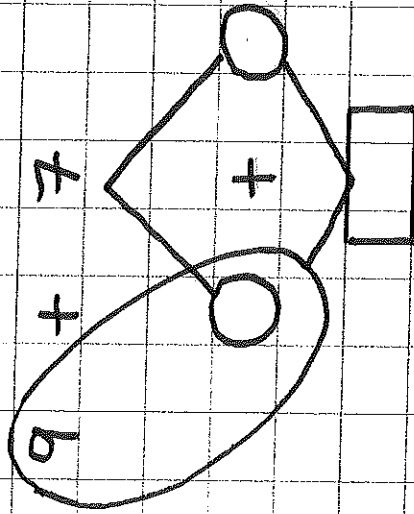
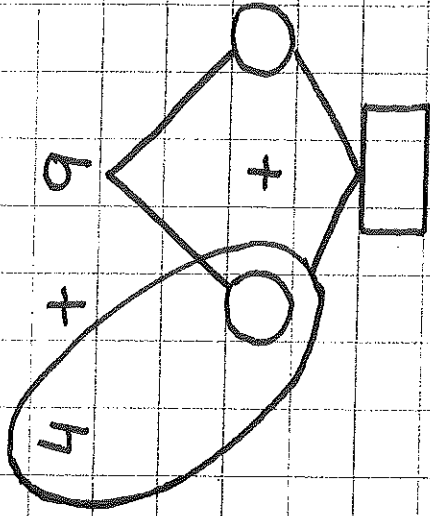
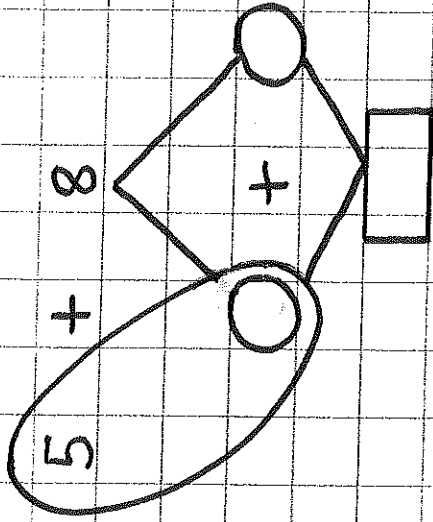
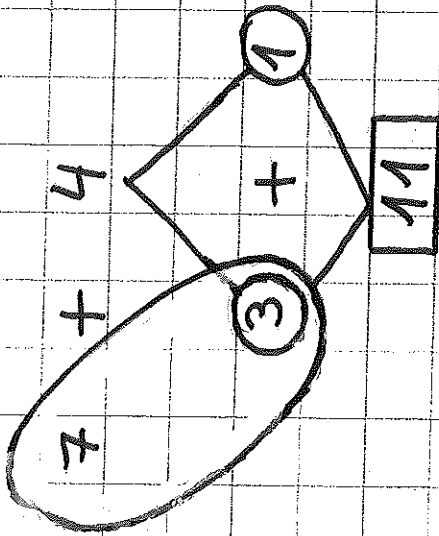


Hazlo en tu cuaderno.



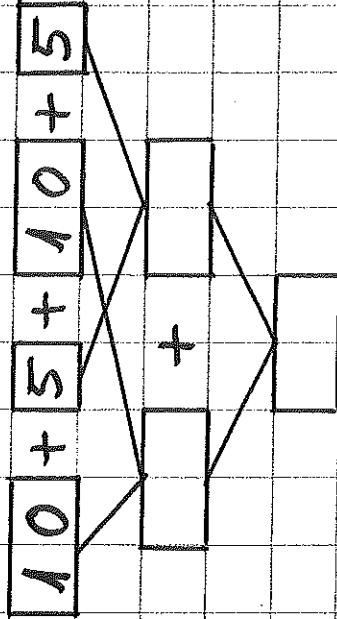
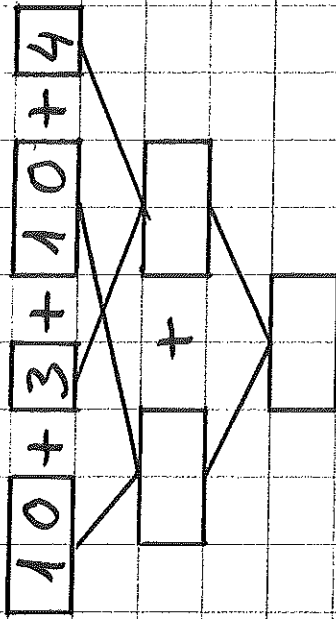
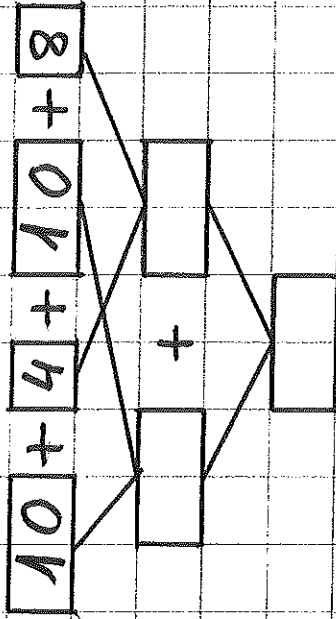
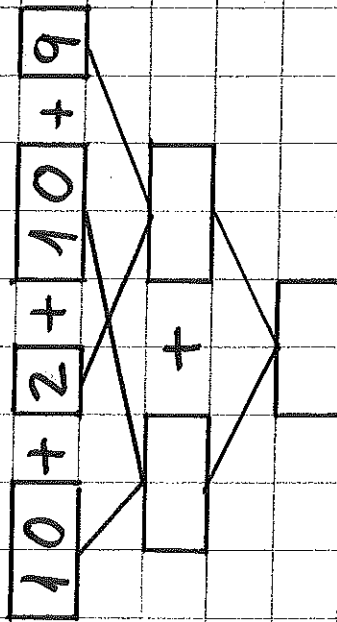
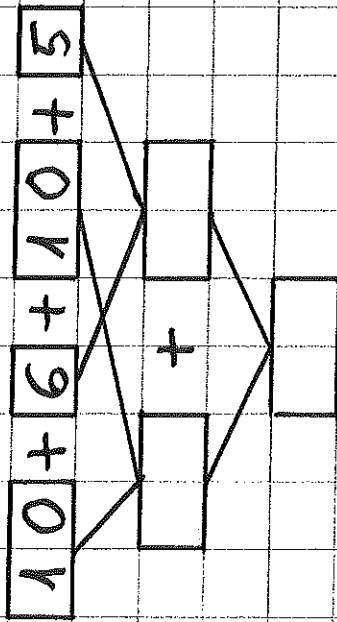
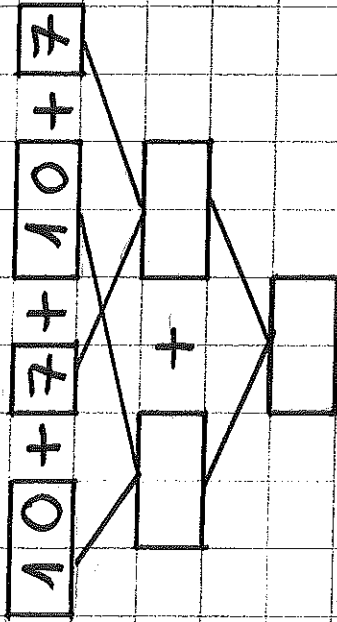
Con regletas

Busca el 10 y suma.



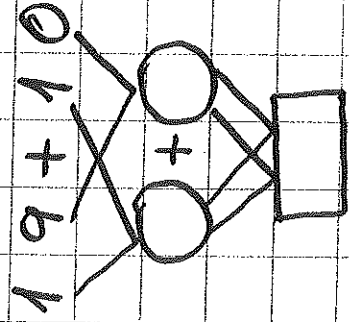
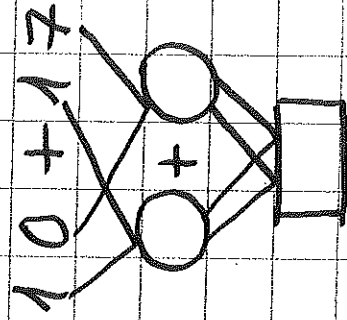
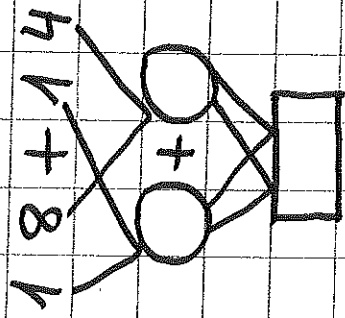
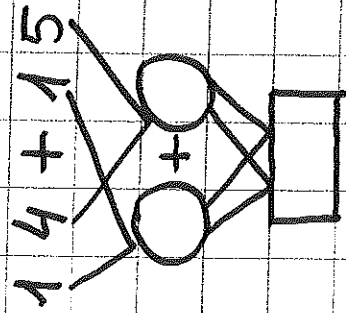
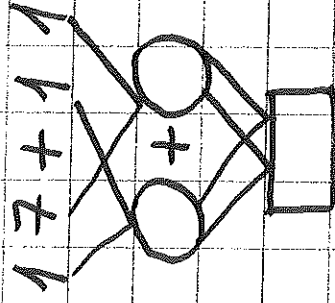
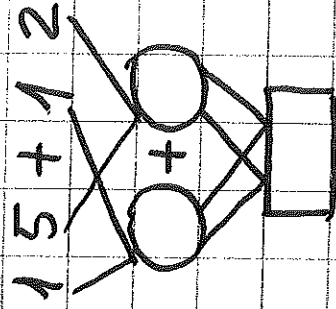
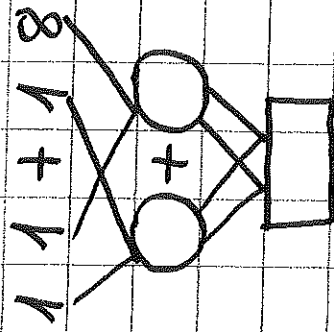
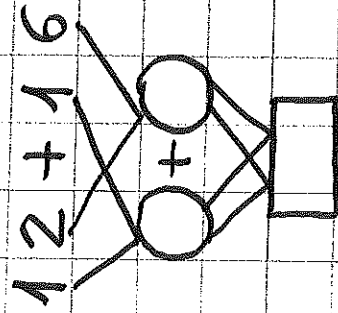
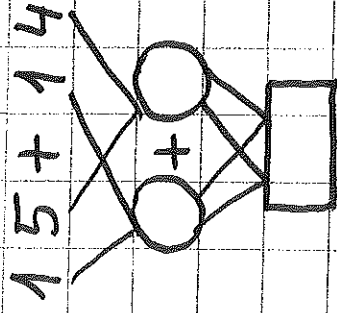
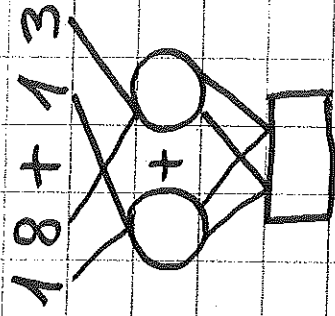
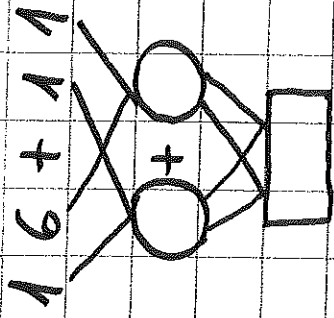
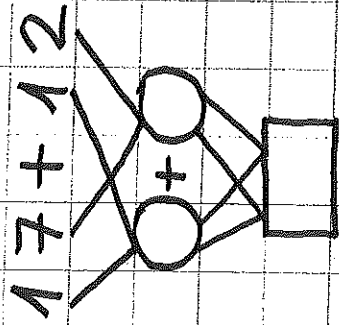
Com regletas

Suma con el 10.



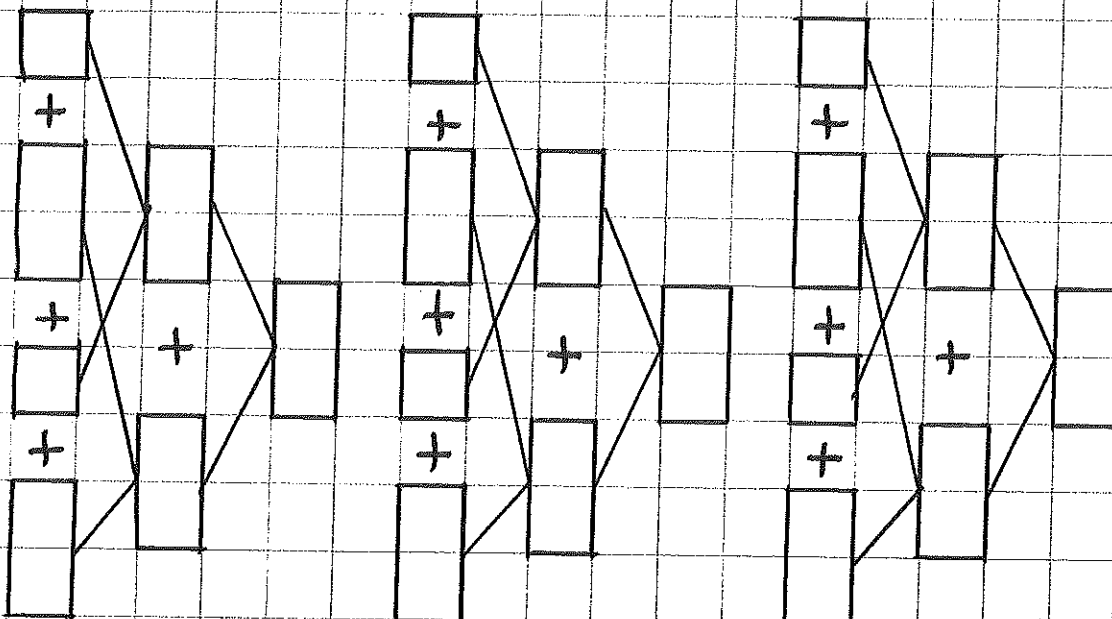
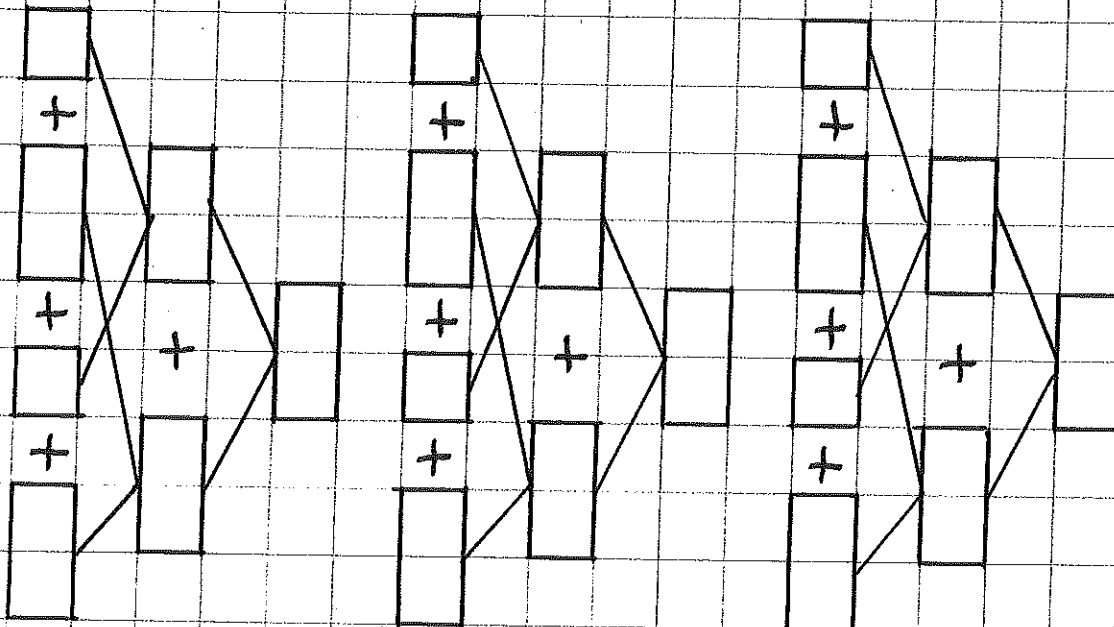
Con regletas

Suma en árbol de decenas.



Con regletas

Suma.



con registros

Suma.

$$\begin{array}{|c|c|c|c|} \hline 20 & + & 3 & + & 30 & + & 2 \\ \hline \end{array}$$

Diagram showing the addition of 20 + 3 + 30 + 2. The first two terms (20 and 3) are grouped together, and the last two terms (30 and 2) are grouped together. Lines connect the tens and ones places of the first group to a single box, and the tens and ones places of the second group to another single box. A plus sign is placed between these two boxes, and a final empty box is provided for the sum.

$$\begin{array}{|c|c|c|c|} \hline 30 & + & 1 & + & 40 & + & 5 \\ \hline \end{array}$$

Diagram showing the addition of 30 + 1 + 40 + 5. The first two terms (30 and 1) are grouped together, and the last two terms (40 and 5) are grouped together. Lines connect the tens and ones places of the first group to a single box, and the tens and ones places of the second group to another single box. A plus sign is placed between these two boxes, and a final empty box is provided for the sum.

$$\begin{array}{|c|c|c|c|} \hline 30 & + & 5 & + & 30 & + & 6 \\ \hline \end{array}$$

Diagram showing the addition of 30 + 5 + 30 + 6. The first two terms (30 and 5) are grouped together, and the last two terms (30 and 6) are grouped together. Lines connect the tens and ones places of the first group to a single box, and the tens and ones places of the second group to another single box. A plus sign is placed between these two boxes, and a final empty box is provided for the sum.

$$\begin{array}{|c|c|c|c|} \hline 30 & + & 4 & + & 50 & + & 5 \\ \hline \end{array}$$

Diagram showing the addition of 30 + 4 + 50 + 5. The first two terms (30 and 4) are grouped together, and the last two terms (50 and 5) are grouped together. Lines connect the tens and ones places of the first group to a single box, and the tens and ones places of the second group to another single box. A plus sign is placed between these two boxes, and a final empty box is provided for the sum.

$$\begin{array}{|c|c|c|c|} \hline 20 & + & 6 & + & 40 & + & 3 \\ \hline \end{array}$$

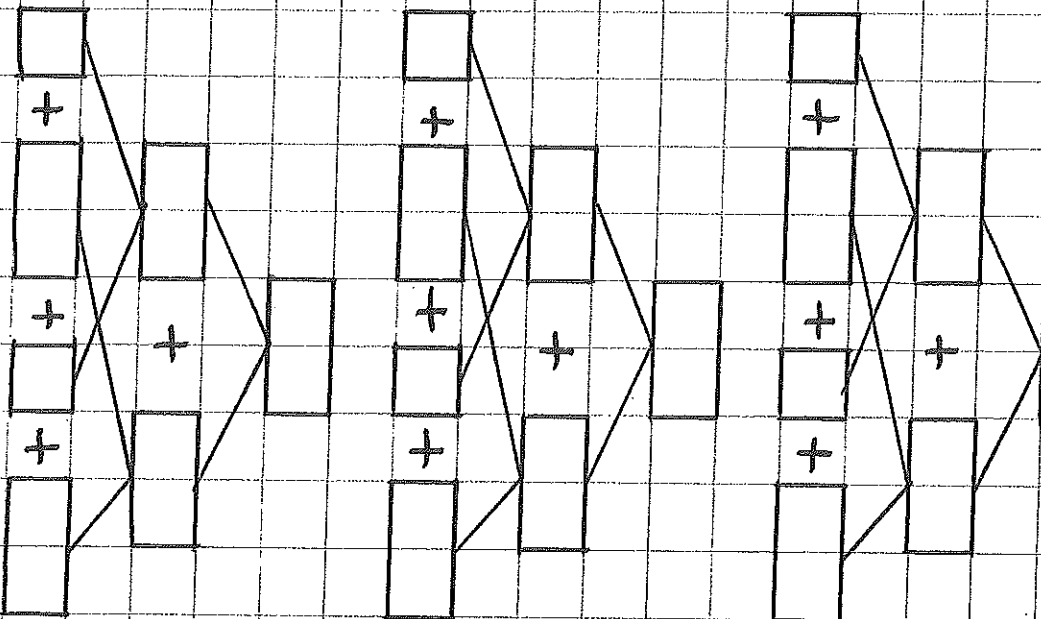
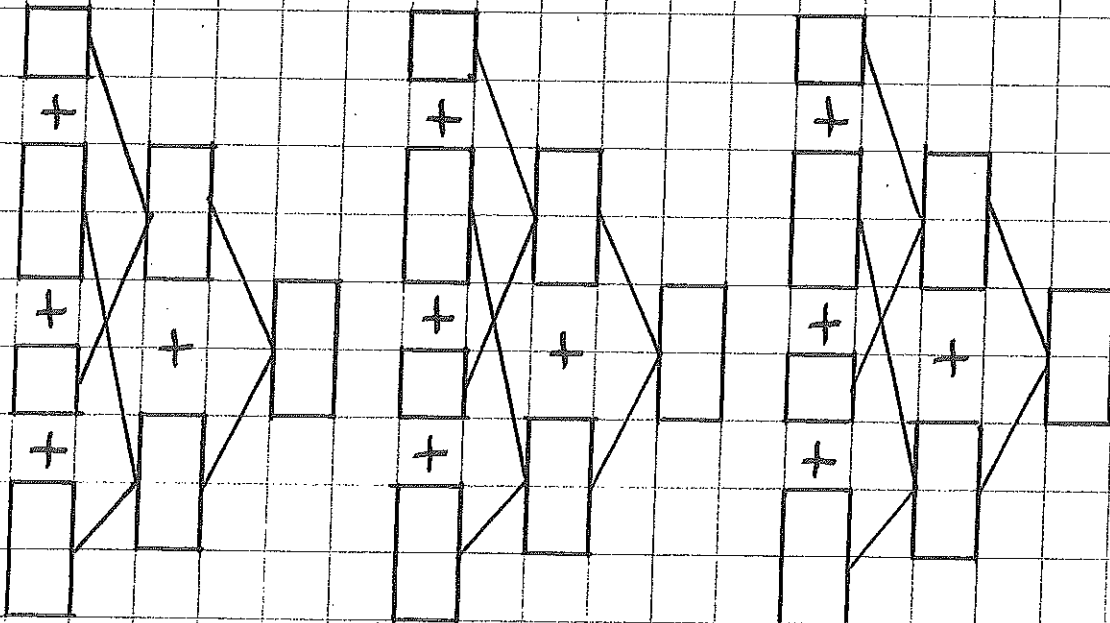
Diagram showing the addition of 20 + 6 + 40 + 3. The first two terms (20 and 6) are grouped together, and the last two terms (40 and 3) are grouped together. Lines connect the tens and ones places of the first group to a single box, and the tens and ones places of the second group to another single box. A plus sign is placed between these two boxes, and a final empty box is provided for the sum.

$$\begin{array}{|c|c|c|c|} \hline 20 & + & 6 & + & 10 & + & 6 \\ \hline \end{array}$$

Diagram showing the addition of 20 + 6 + 10 + 6. The first two terms (20 and 6) are grouped together, and the last two terms (10 and 6) are grouped together. Lines connect the tens and ones places of the first group to a single box, and the tens and ones places of the second group to another single box. A plus sign is placed between these two boxes, and a final empty box is provided for the sum.

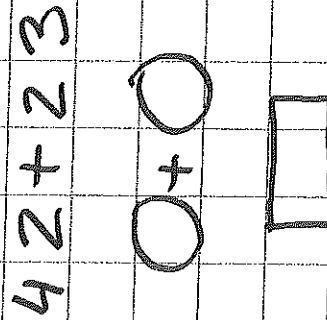
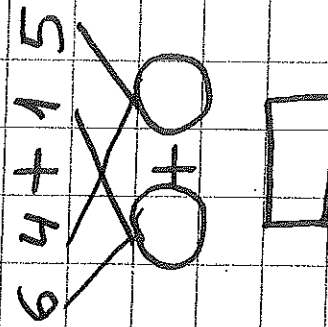
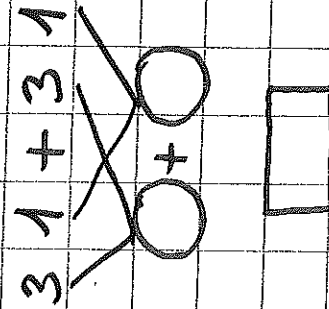
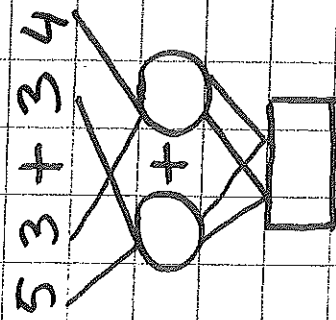
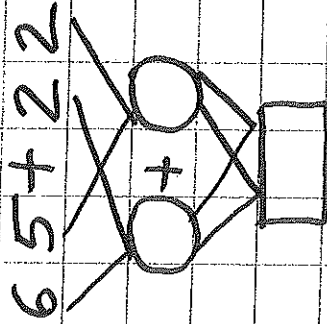
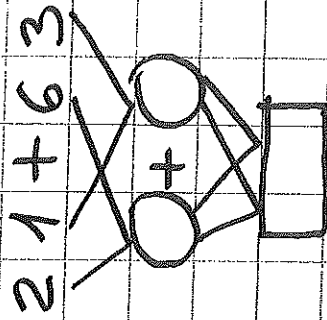
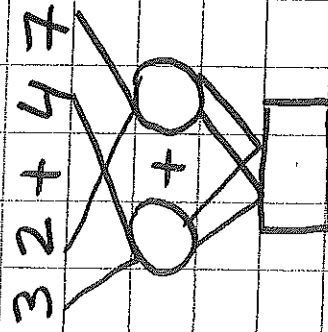
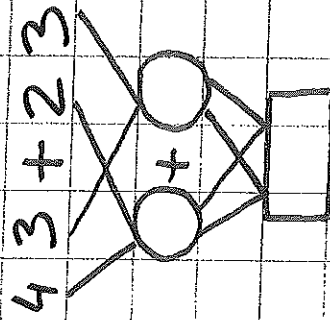
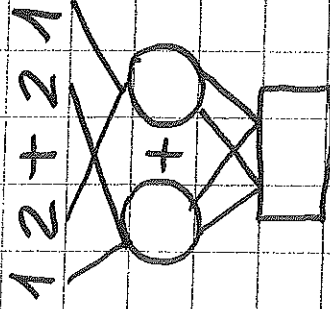
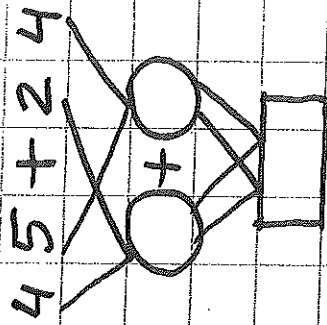
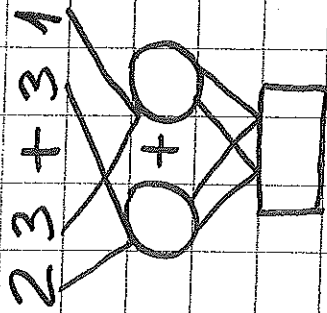
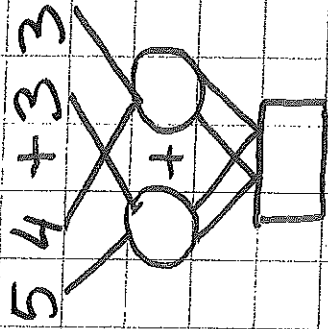
con regletas

Suma.



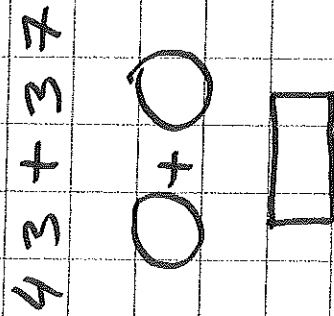
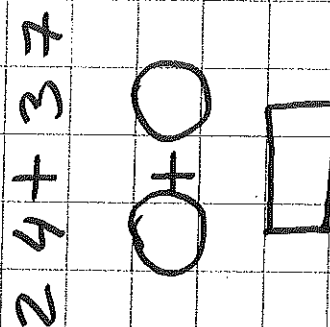
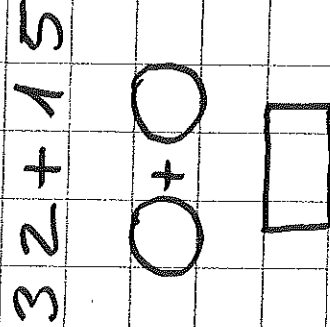
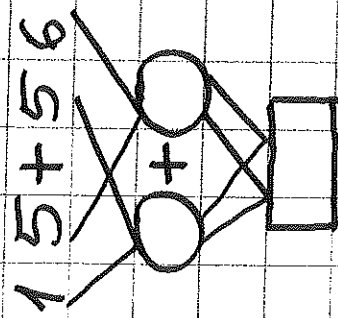
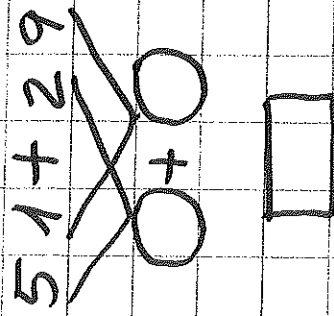
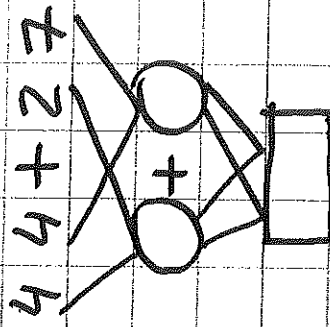
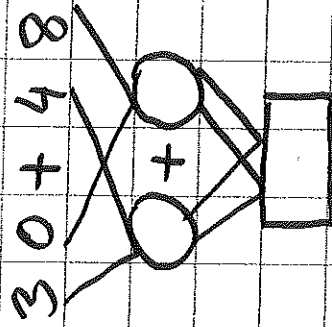
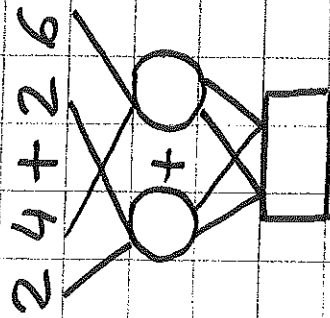
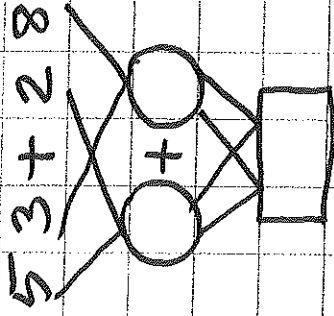
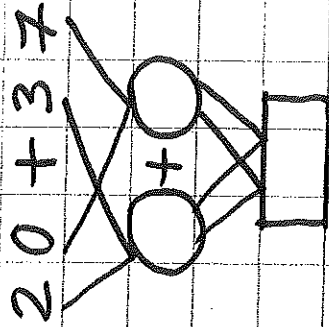
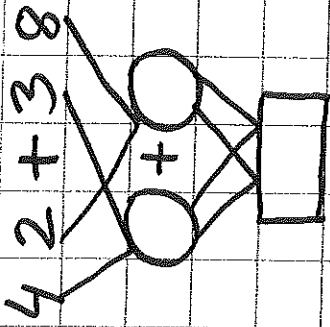
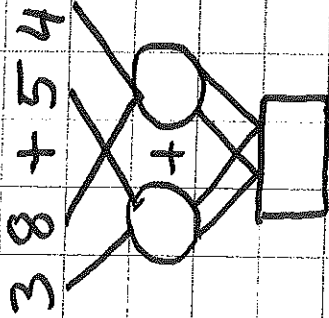
con regletas

Suma en árbol



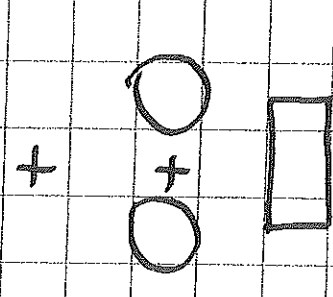
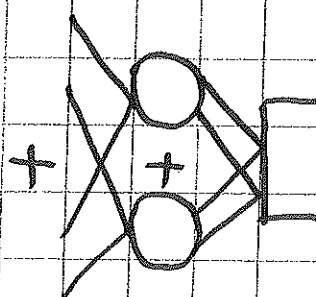
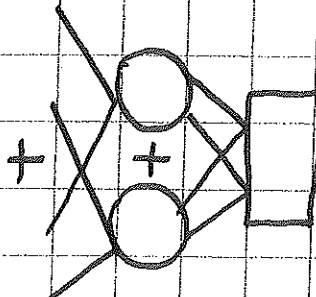
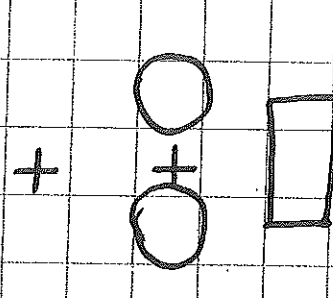
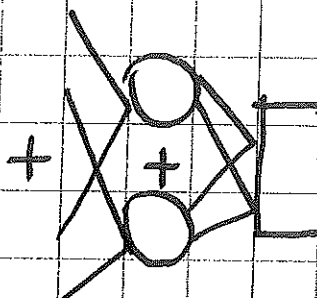
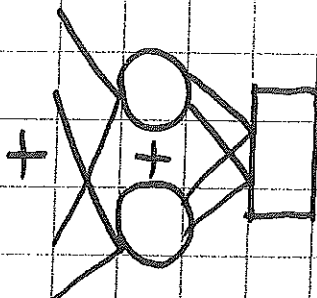
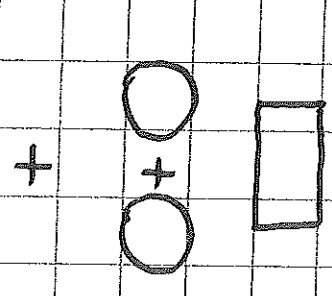
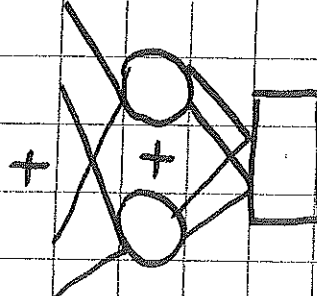
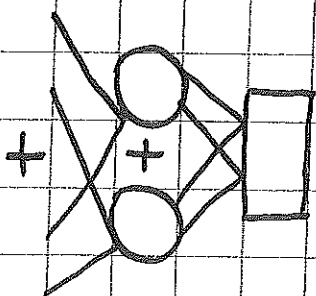
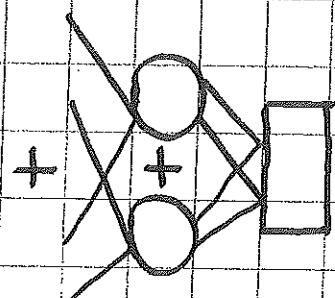
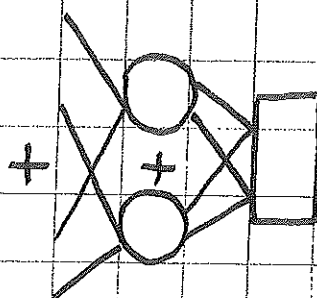
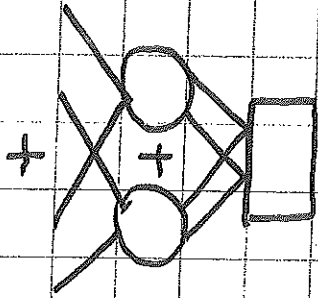
Con regletas

Suma en árbol



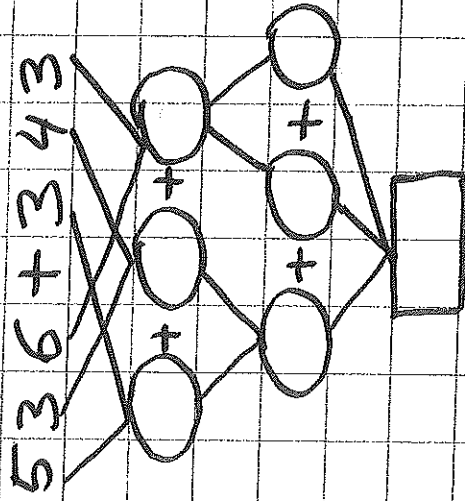
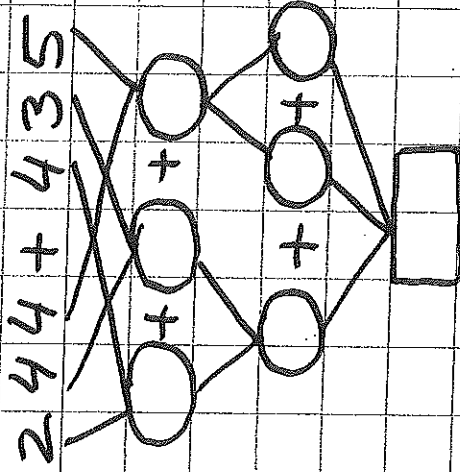
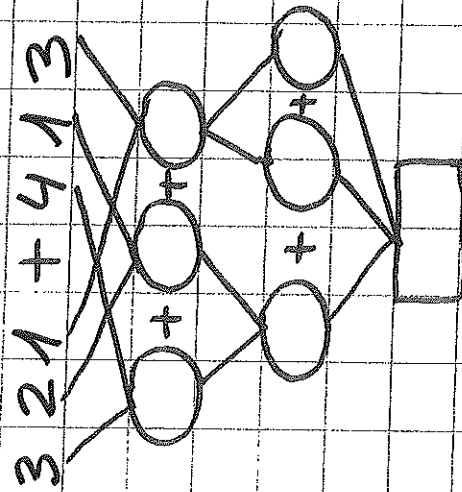
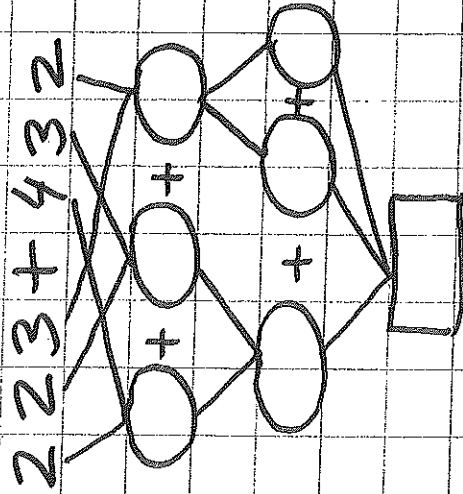
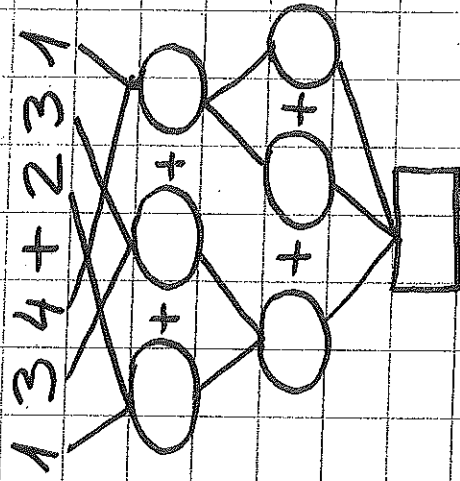
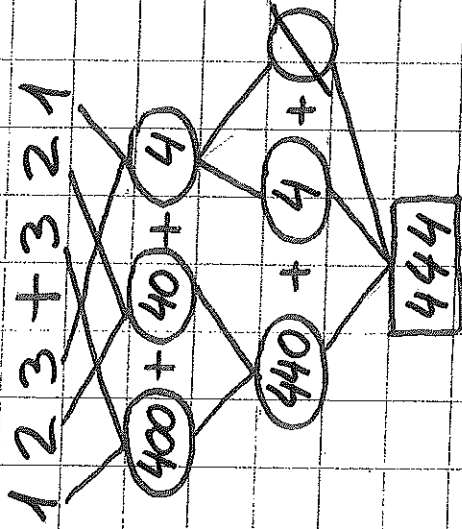
Con regletas

Suma en árbol



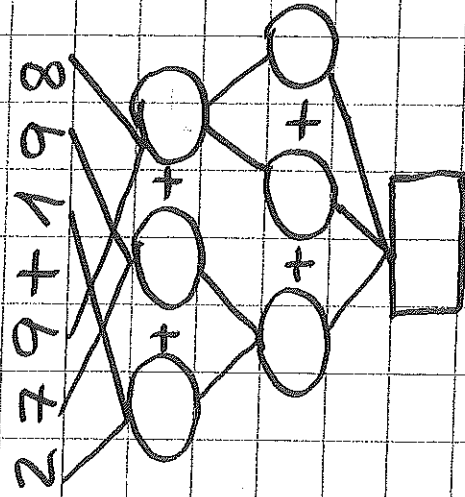
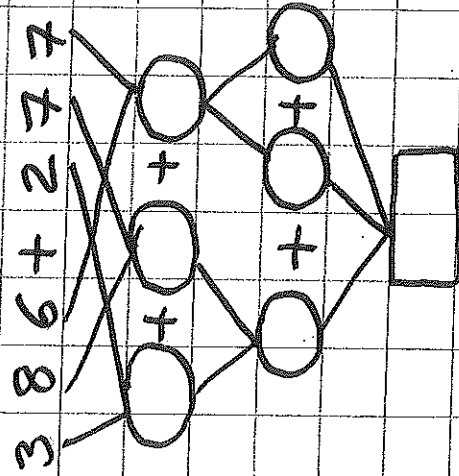
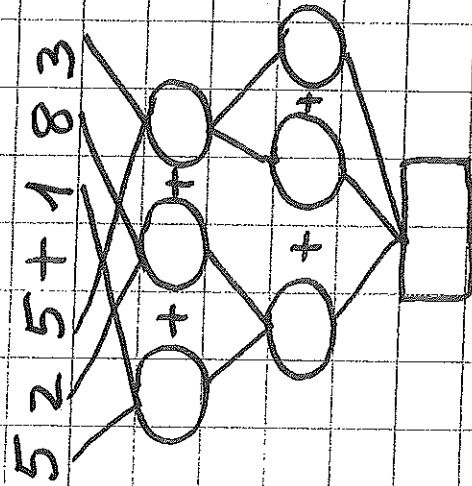
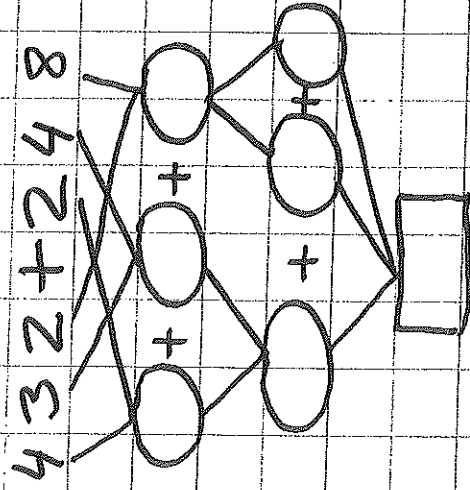
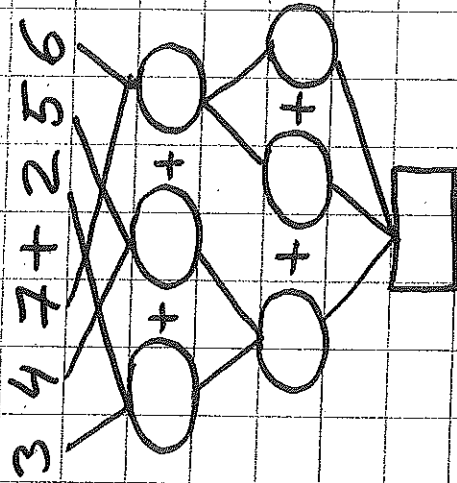
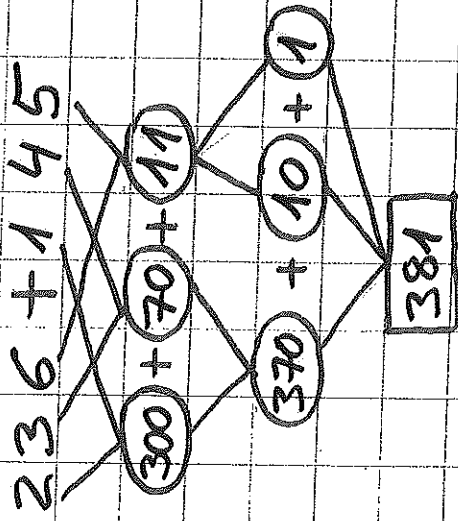
Completar

Sumas de centenas en árbol.



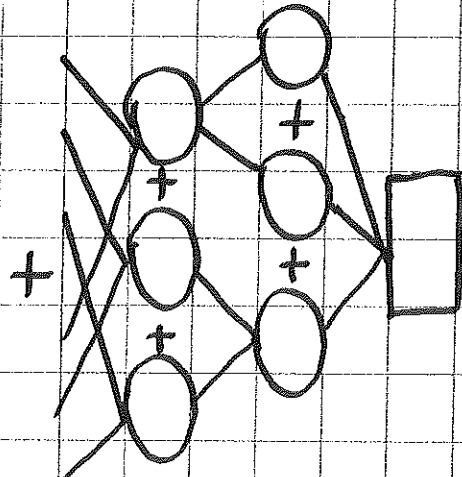
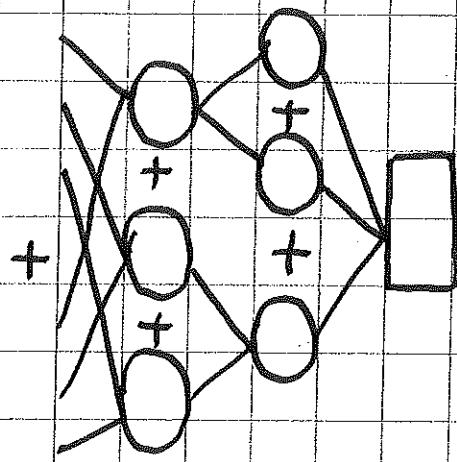
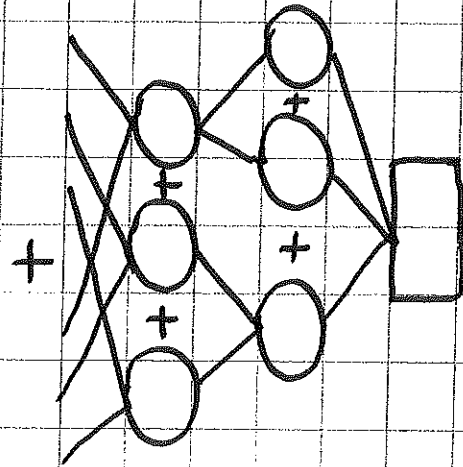
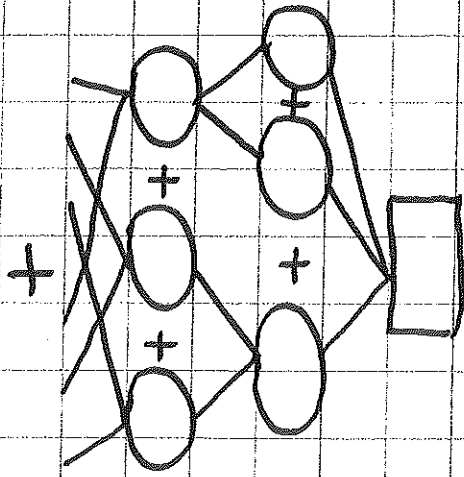
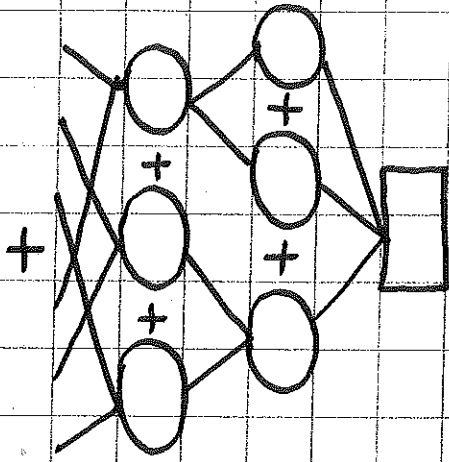
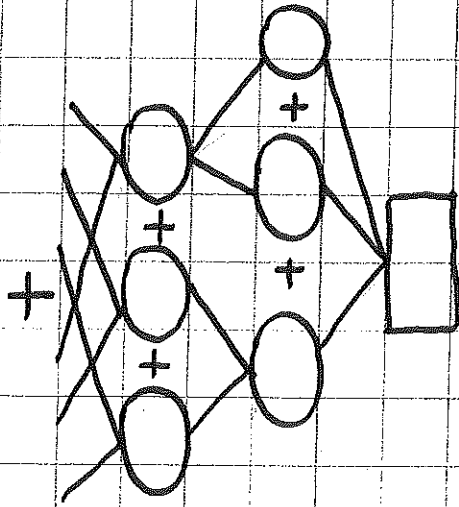
con regletas

Sumas de centenas en árbol.



Completar

Sumas de centenas en árbol.



con regletas

Resta.

$$\begin{array}{r} 34 = 15 + 5 + 10 + 4 \\ - 15 \\ \hline 19 \end{array}$$

$$\begin{array}{r} 28 \\ - 22 \\ \hline \end{array}$$

$$\begin{array}{r} 53 \\ - 35 \\ \hline \end{array}$$

$$\begin{array}{r} 76 \\ - 57 \\ \hline \end{array}$$

$$\begin{array}{r} 45 \\ - 34 \\ \hline \end{array}$$

$$\begin{array}{r} 61 \\ - 58 \\ \hline \end{array}$$

$$\begin{array}{r} 87 \\ - 69 \\ \hline \end{array}$$

$$\begin{array}{r} 97 \\ - 76 \\ \hline \end{array}$$

Com regletas