

# Escribe todo sobre el número



TODO SOBRE EL NÚMERO




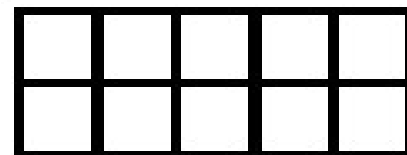
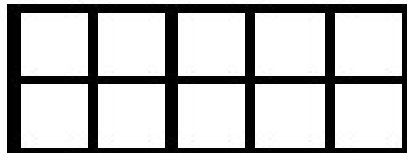

SE ESCRIBE: \_\_\_\_\_

D	U

SU AMIGO DEL 10 ES:



CONTAMOS



$$\square + \square + \square = \square$$

REPRESENTA CON:

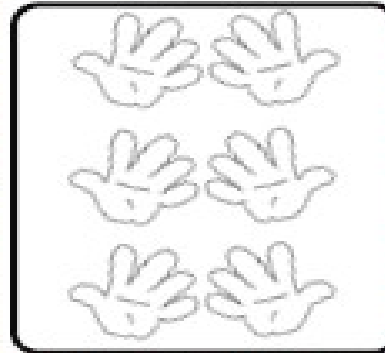
SÍMBOLOS: ○ |




PALILLOS:



MANOS:



LOCALIZACIÓN:



LOS AMIGOS DEL:

