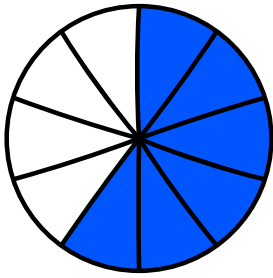
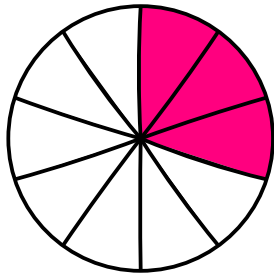


¿Cuánto me falta para tener 10?



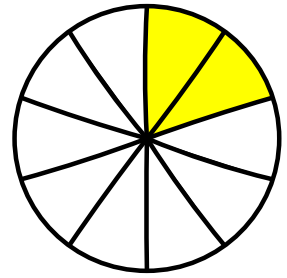
De los 10 ya tengo ____.
Me faltan _____

$$10 - \square = \square$$



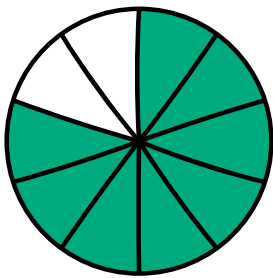
De los 10 ya tengo ____.
Me faltan _____

$$10 - \square = \square$$



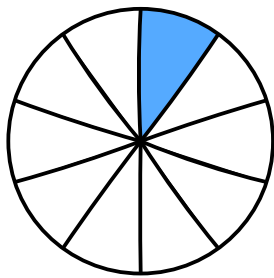
De los 10 ya tengo ____.
Me faltan _____

$$10 - \square = \square$$



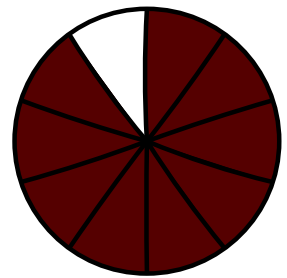
De los 10 ya tengo ____.
Me faltan _____

$$10 - \square = \square$$



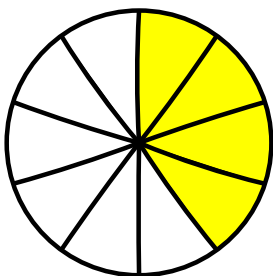
De los 10 ya tengo ____.
Me faltan _____

$$10 - \square = \square$$



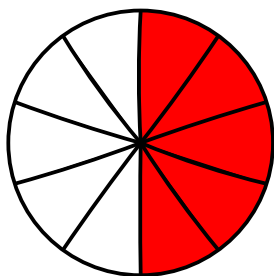
De los 10 ya tengo ____.
Me faltan _____

$$10 - \square = \square$$



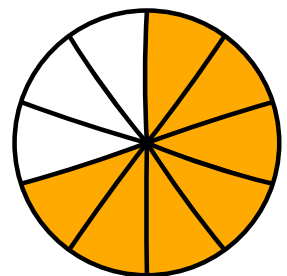
De los 10 ya tengo ____.
Me faltan _____

$$10 - \square = \square$$



De los 10 ya tengo ____.
Me faltan _____

$$10 - \square = \square$$



De los 10 ya tengo ____.
Me faltan _____

$$10 - \square = \square$$