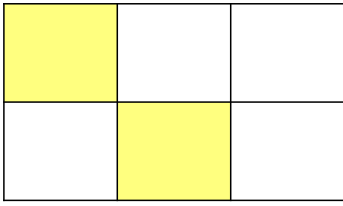
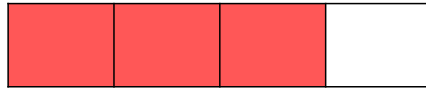


¿Cuánto me falta para tener ___?



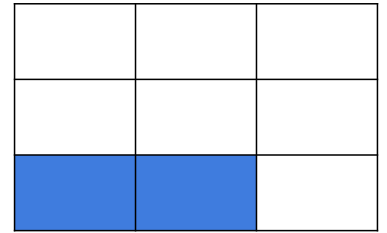
De los ___ ya tengo ____.
Me faltan _____

$$\square - \square = \square$$



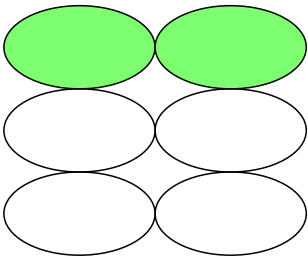
De los ___ ya tengo ____.
Me faltan _____

$$\square - \square = \square$$



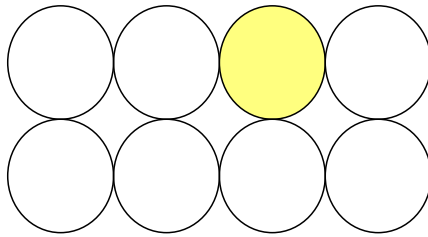
De los ___ ya tengo ____.
Me faltan _____

$$\square - \square = \square$$



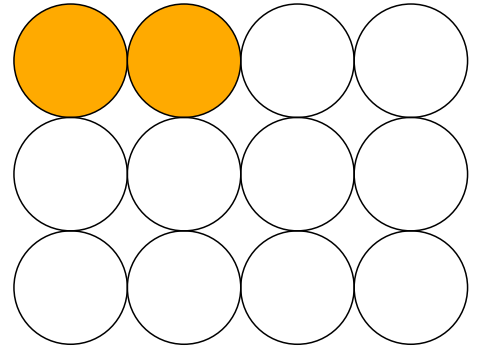
De los ___ ya tengo ____.
Me faltan _____

$$\square - \square = \square$$



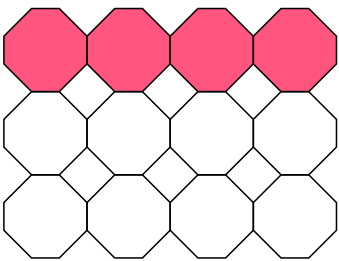
De los ___ ya tengo ____.
Me faltan _____

$$\square - \square = \square$$



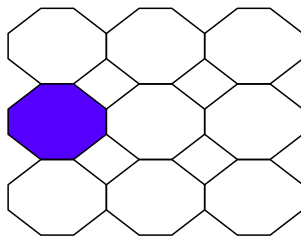
De los ___ ya tengo ____.
Me faltan _____

$$\square - \square = \square$$



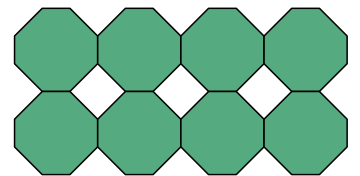
De los ___ ya tengo ____.
Me faltan _____

$$\square - \square = \square$$



De los ___ ya tengo ____.
Me faltan _____

$$\square - \square = \square$$



De los ___ ya tengo ____.
Me faltan _____

$$\square - \square = \square$$