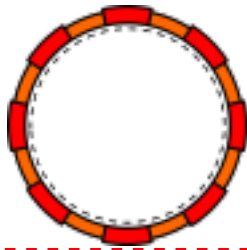


TODO SOBRE EL NÚMERO



SE ESCRIBE:.....



| | |
|---|---|
| D | U |
| | |

SU AMIGO DEL 10 ES:



CONTAMOS

| | | | | |
|--|--|--|--|--|
| | | | | |
| | | | | |



| | | | | |
|--|--|--|--|--|
| | | | | |
| | | | | |



| | | | | |
|--|--|--|--|--|
| | | | | |
| | | | | |



$$\square + \square + \square = \square$$

REPRESENTA CON:


SÍMBOLOS: ○ |




PALILLOS:



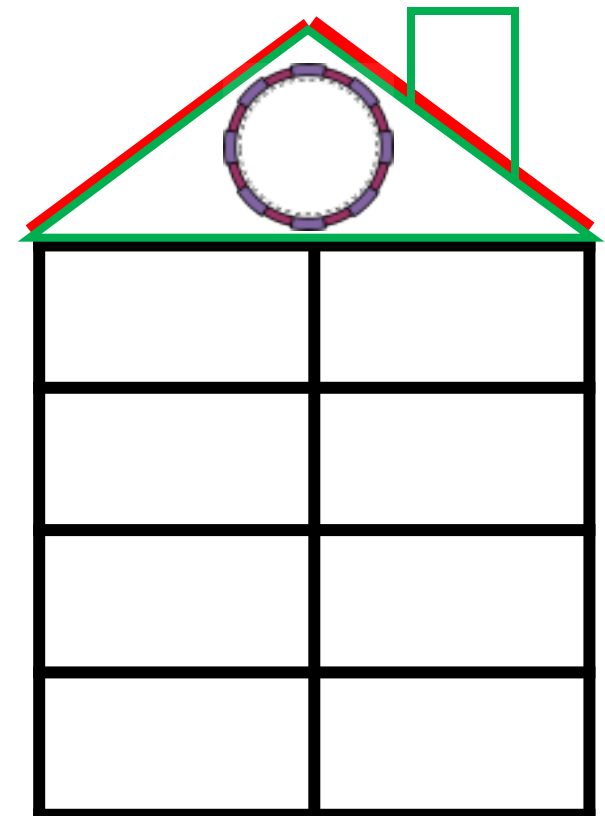
MANOS:



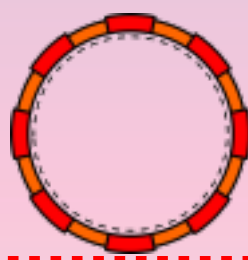
LOCALIZACIÓN:




LOS AMIGOS DEL:



TODOS SOBRE EL NÚMERO



SE ESCRIBE:



| | |
|---|---|
| D | U |
| | |

SU AMIGO DEL 10 ES:



CONTAMOS

| | | | | |
|--|--|--|--|--|
| | | | | |
| | | | | |



| | | | | |
|--|--|--|--|--|
| | | | | |
| | | | | |




| | | | | |
|--|--|--|--|--|
| | | | | |
| | | | | |




$$\square + \square + \square = \square$$

REPRESENTA CON:


SÍMBOLOS: ○ |




PALILLOS:



MANOS:



LOCALIZACIÓN:



LOS AMIGOS DEL:

